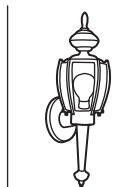

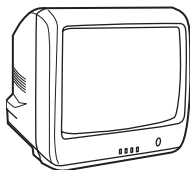


Homework Practice**3MG2.6***Complex Solid Figures***Identify the figures that make each complex solid.****1.**

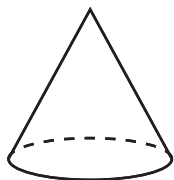
2.

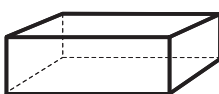
3.

4.

Solve.

- 5.** Lucy was helping her parents construct a concrete birdbath in her backyard. They had a cone shape and a flattened cylinder. How do you think they put this birdbath together?

Identify each solid figure. (Lesson 10-8)**6.**

7.

8.